

**► TASK** Draw a diagram of the shop and label all parts.

**Additional Task**

Time off \_\_\_\_\_

Time on \_\_\_\_\_

Total time \_\_\_\_\_


**CDX Tasksheet Number: N/A**

1. On a full-sized piece of paper, draw a diagram of the shop and label each of the following:
  - a. Marked safety areas (floor lines, etc.) \_\_\_\_\_ (X when finished)
  - b. Location of the fire blanket(s) \_\_\_\_\_ (X when finished)
  - c. Location of all fire extinguishers \_\_\_\_\_ (X when finished)
  - d. Location of the exhaust fan switch(es) \_\_\_\_\_ (X when finished)
  - e. Location of the electrical disconnect switch(es) \_\_\_\_\_ (X when finished)
  - f. Location of the eye wash station(s) \_\_\_\_\_ (X when finished)
  - g. Location of the SDS books \_\_\_\_\_ (X when finished)
  - h. Evacuation route(s) \_\_\_\_\_ (X when finished)
  - i. Location of the master air shut-off valve \_\_\_\_\_ (X when finished)
  - j. Location of the over-head door switch(es) \_\_\_\_\_ (X when finished)


2. Have your supervisor/instructor verify satisfactory completion of this task.

**Performance Rating**


**CDX Tasksheet Number: N/A**




**0**




**1**



**2**



**3**



**4**

Supervisor/instructor signature \_\_\_\_\_ Date \_\_\_\_\_